
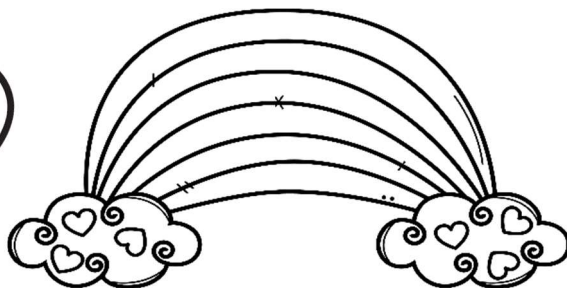






# Valentines Addition to 10

Directions: Add the numbers and write the answer in the given box.


$7 + 5 =$  





$6 + 2 =$  


$5 + 5 =$  




$2 + 2 =$  


$1 + 3 =$  

$4 + 3 =$  


$6 + 4 =$  




$8 + 1 =$  

$3 + 5 =$  



$2 + 7 =$  

$9 + 1 =$  



$4 + 4 =$  